

FREE!


HOW MANY SHAPES?

Name: _____ Date: _____

How Many?

Directions: Count the number of shapes in each group.


How many triangles do you see?

 triangles


How many hearts do you see?

 hearts

How many squares do you see?

 squares

How many stars do you see?


 stars

Name: _____ Date: _____


How Many?

Directions: Count the number of shapes in each group.


How many diamonds do you see?

 diamonds


How many crescents do you see?

 crescents

How many arrows do you see?

 arrows

How many rectangles do you see?

 rectangles

www.TheTeacherTreasury.com

Name: _____

Date: _____

How Many?

Directions: Count the number of shapes in each group.

How many triangles do you see?



triangles

How many hearts do you see?



hearts

How many squares do you see?



squares

How many stars do you see?



stars


Name: _____

Date: _____

How Many?

Directions: Count the number of shapes in each group.

How many diamonds do you see?



diamonds

How many crescents do you see?



crescents

How many arrows do you see?



arrows

How many crosses do you see?



rectangles


Name: _____

Date: _____

How Many?

Directions: Count the number of shapes in each group.

How many circles do you see?



circles

How many pentagons do you see?



pentagons

How many trapezoids do you see?



trapezoid

How many clouds do you see?



clouds

ACKNOWLEDGEMENTS

Borders, fonts, and graphics by



Canva



FOLLOW
US!

Follow, Tweet, Pin, & Share!



Thank you for downloading!

www.TheTeacherTreasury.com



HELP US GROW



Please take a moment to tell other educators about our website and resources.

www.TheTeacherTreasury.com

We appreciate your support!

