

EQUIVALENT FRACTIONS

Name: _____ Date: _____

Equivalent Fractions

Directions: Find the equivalent fractions. Circle the correct answer.

Find the fraction that is equivalent to $\frac{2}{4}$.

$\frac{1}{2}$ $\frac{1}{4}$ $\frac{1}{3}$ $\frac{1}{6}$

Find the fraction that is equivalent to $\frac{2}{6}$.

$\frac{1}{4}$ $\frac{2}{3}$ $\frac{3}{4}$ $\frac{1}{3}$

Find the fraction that is equivalent to $\frac{2}{8}$.

$\frac{1}{4}$ $\frac{2}{3}$ $\frac{3}{4}$ $\frac{1}{5}$

Find the fraction that is equivalent to $\frac{4}{6}$.

$\frac{1}{4}$ $\frac{2}{3}$ $\frac{3}{4}$ $\frac{1}{5}$

Find the fraction that is equivalent to $\frac{4}{8}$.

$\frac{1}{6}$ $\frac{1}{3}$ $\frac{3}{4}$ $\frac{1}{2}$

www.TheTeacherTreasury.com

Date: _____

Equivalent Fractions



Use the pictures to help you find the equivalent fraction. Circle the correct answer.

Find the fraction that is equivalent to $\frac{2}{4}$.

$\frac{1}{2}$
 $\frac{1}{4}$
 $\frac{1}{3}$
 $\frac{1}{6}$

Find the fraction that is equivalent to $\frac{2}{6}$.

$\frac{1}{3}$
 $\frac{1}{4}$
 $\frac{2}{3}$
 $\frac{3}{4}$

Find the fraction that is equivalent to $\frac{2}{8}$.

$\frac{2}{3}$
 $\frac{1}{4}$
 $\frac{3}{4}$
 $\frac{1}{5}$

Find the fraction that is equivalent to $\frac{4}{6}$.

$\frac{1}{6}$
 $\frac{1}{5}$
 $\frac{2}{3}$
 $\frac{1}{5}$

www.TheTeacherTreasury.com

Name: _____ Date: _____

Equivalent Fractions

Directions: Find the equivalent fractions. Circle the correct answer.

Find the fraction that is equivalent to $\frac{2}{4}$.

$\frac{1}{2}$

$\frac{1}{4}$

$\frac{1}{3}$

$\frac{1}{6}$

Find the fraction that is equivalent to $\frac{2}{6}$.

$\frac{1}{4}$

$\frac{2}{3}$

$\frac{3}{4}$

$\frac{1}{3}$

Find the fraction that is equivalent to $\frac{2}{8}$.

$\frac{1}{4}$

$\frac{2}{3}$

$\frac{3}{4}$

$\frac{1}{5}$

Find the fraction that is equivalent to $\frac{4}{6}$.

$\frac{1}{4}$

$\frac{2}{3}$

$\frac{3}{4}$

$\frac{1}{5}$

Find the fraction that is equivalent to $\frac{4}{8}$.

$\frac{1}{6}$

$\frac{1}{3}$

$\frac{3}{4}$

$\frac{1}{2}$

Name: _____ Date: _____

Equivalent Fractions

Directions: Find the equivalent fractions. Circle the correct answer.

Find the fraction that is equivalent to $\frac{3}{9}$.

$\frac{1}{2}$

$\frac{1}{4}$

$\frac{1}{3}$

$\frac{1}{6}$

Find the fraction that is equivalent to $\frac{6}{10}$.

$\frac{1}{4}$

$\frac{2}{3}$

$\frac{3}{5}$

$\frac{1}{3}$

Find the fraction that is equivalent to $\frac{4}{12}$.

$\frac{1}{4}$

$\frac{2}{3}$

$\frac{3}{4}$

$\frac{1}{3}$

Find the fraction that is equivalent to $\frac{3}{15}$.

$\frac{1}{4}$

$\frac{2}{3}$

$\frac{3}{4}$

$\frac{1}{5}$

Find the fraction that is equivalent to $\frac{2}{10}$.

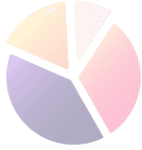
$\frac{1}{6}$

$\frac{1}{3}$

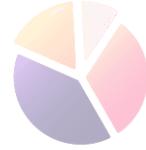
$\frac{1}{5}$

$\frac{1}{2}$

Name: _____ Date: _____



Equivalent Fractions



Directions: Draw pictures to help you find the equivalent fraction.
Circle the correct answer.

Find the fraction that is equivalent to $\frac{2}{4}$.

- $\frac{1}{2}$
- $\frac{1}{4}$
- $\frac{1}{3}$
- $\frac{1}{6}$

Find the fraction that is equivalent to $\frac{2}{6}$.

- $\frac{1}{3}$
- $\frac{1}{4}$
- $\frac{2}{3}$
- $\frac{3}{4}$

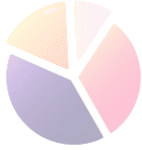
Find the fraction that is equivalent to $\frac{2}{8}$.

- $\frac{2}{3}$
- $\frac{1}{4}$
- $\frac{3}{4}$
- $\frac{1}{5}$

Find the fraction that is equivalent to $\frac{4}{6}$.

- $\frac{1}{6}$
- $\frac{1}{3}$
- $\frac{2}{3}$
- $\frac{1}{5}$

Name: _____ Date: _____



Equivalent Fractions



Directions: Draw pictures to help you find the equivalent fraction.
Circle the correct answer.

Find the fraction that is equivalent to $\frac{4}{8}$.

$\frac{1}{6}$
 $\frac{1}{3}$
 $\frac{2}{3}$
 $\frac{1}{2}$

Find the fraction that is equivalent to $\frac{8}{12}$.

$\frac{1}{2}$
 $\frac{1}{4}$
 $\frac{2}{3}$
 $\frac{2}{5}$

Find the fraction that is equivalent to $\frac{3}{9}$.

$\frac{1}{4}$
 $\frac{2}{3}$
 $\frac{3}{4}$
 $\frac{1}{3}$

Find the fraction that is equivalent to $\frac{6}{10}$.

$\frac{2}{3}$
 $\frac{3}{5}$
 $\frac{3}{4}$
 $\frac{1}{5}$

ACKNOWLEDGEMENTS

Borders, fonts, and graphics by



Follow, Tweet, Pin, & Share!



Thank you for downloading!

www.TheTeacherTreasury.com



HELP US GROW!

Please take a moment to tell other educators about our website and resources.

www.TheTeacherTreasury.com



**We appreciate
your support!**